



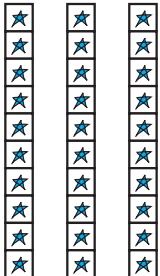








# Place Value: Single Stickers and Strips of 10

Jake went shopping at Sticker Station.

What Jake bought	How many strips of 10? 	How many singles? 	How many stickers?
  11 10	1	1	$10 + 1 = 11$ 11 stickers
  35  34  33  32  31 10 20 30	3	5	$30 + 5 = 35$ 35 stickers
 10 20 30 40	4	0	$40 + 0 = 40$ 40 stickers



If Jake bought 52 stickers, how many strips of 10 and how many singles could he have?