

Sticker Problems (page 1 of 2)




Solve each problem. Show your work and write an equation.

1. Sally went to Sticker Station. She bought 2 strips of ten star stickers and 6 single star stickers. She also bought 2 strips of ten moon stickers and 3 single moon stickers. How many stickers did Sally buy?





2. Franco had 25 dragon stickers. He went to Sticker Station and bought 2 more strips of ten dragon stickers. How many stickers does Franco have now?



Sticker Problems (page 2 of 2)



3. Jake bought some stickers at Sticker Station. He bought 4 strips of ten sun stickers and 3 single sun stickers. He also bought 2 strips of ten moon stickers and 5 single moon stickers. How many stickers did Jake buy?



4. Kira had 30 puppy stickers. She went to Sticker Station and bought one more strip of ten puppy stickers and 5 single puppy stickers. How many stickers does Kira have now?

