

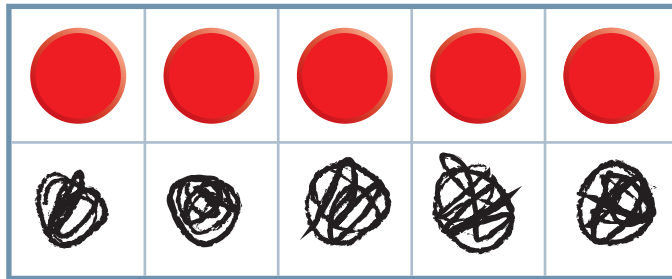
NAME _____

DATE _____

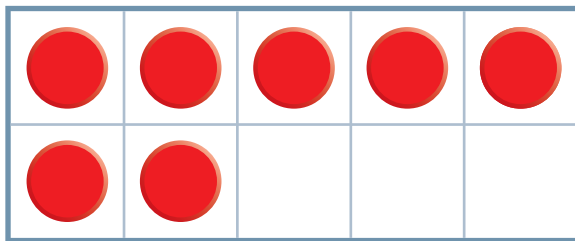
How Many to 10?

Fill in each Ten Frame to make 10. Write the equation.

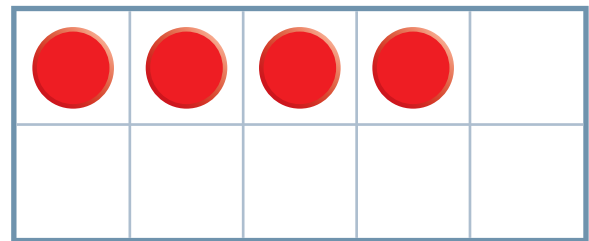
Example:



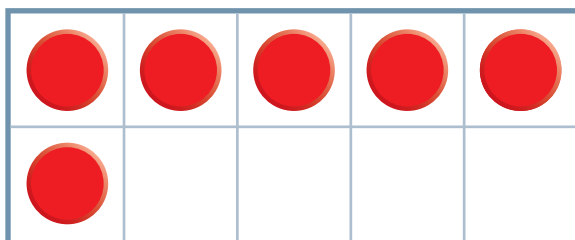
$$\underline{5} + \underline{5} = 10$$

1



$$\underline{\quad} + \underline{\quad} = 10$$

2


$$\underline{\quad} + \underline{\quad} = 10$$

3


$$\underline{\quad} + \underline{\quad} = 10$$

4


$$\underline{\quad} + \underline{\quad} = 10$$

NOTE

Students practice combinations that make 10.

MWI Making 10